



# MACRO VISION ACADEMY, BURHANPUR

Sample Paper (2018-19)

Class: III

Time: 1:30Hrs.

M.M.: 50

Name: \_\_\_\_\_

## English (15 Marks)

**Q.1 Read the passage carefully and answer the questions: 4**

Yesterday was Sunday. Meenu and Neel got up late in the morning. They brushed their teeth and bathed. They got ready and went for breakfast. They put napkins under the plate. Meenu spread butter on the slice of bread. Neel put sugar in the milk. Both of them drank milk and ate bread. They did not talk while chewing the food. They kept all the things back in the kitchen. They cleaned the table with duster. They enjoyed their Sunday a lot.

1. Who got up late in the morning ?

Ans: \_\_\_\_\_.

2. What did they put under the plate ?

Ans: \_\_\_\_\_.

3. How did they clean the table ?

Ans: \_\_\_\_\_.

4. Write the opposites of the following words from the passage ?

1) Early \_\_\_\_\_ 2) Dirty \_\_\_\_\_

**Q.2 Circle the correct pronouns: 1**

1. They / me are watching Cartoon.

2. I / we am playing cricket.

**Q.3 Fill in the blanks by using correct is , am or are. 3**

1. Children \_\_\_\_\_ studying in the class.

2. I \_\_\_\_\_ writing a letter.

3. Radha \_\_\_\_\_ going to market.

**Q.4 Write the plural of these words: 1**

1. Ox \_\_\_\_\_ 2.fish \_\_\_\_\_.

**Q.5 Circle the noun in the sentences. 2**

1. Sameer is an intelligent boy.

2. Mangoes are ripe.

**Q.6 Circle the correct adverbs. 2**

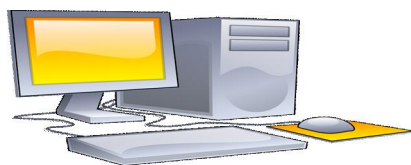
1. Children are playing outside.

2. The man walked happily.



**Q.7 Look at the picture and write two lines on it.**

2



(1) \_\_\_\_\_

(2) \_\_\_\_\_

**Mathematics (20 Marks)**

**Q.1 Tick the correct answer:**

4

- The smallest number among 36, 62 and 32 is .....  
(a) 36                      (b) 62                      (c) 32
- The number with '4' in the hundreds place is .....  
(a) 374                      (b) 423                      (c) 149
- Six hundred ten is written as .....  
(a) 016                      (b) 610                      (c) 611
- The third month of the year is .....  
(a) January                (b) December              (c) March

**Q.2 Match the columns:**

4

| Column A  | Column B |
|-----------|----------|
| 1. 6 - 3  | 4 sides  |
| 2. Square | 7 days   |
| 3. 1 week | 9        |
| 4. 5 + 4  | 3        |

**Q.3 Solve the following:**

6

1. 
$$\begin{array}{r} 365 \\ + 103 \\ \hline \end{array}$$

2. 
$$\begin{array}{r} 383 \\ - 301 \\ \hline \end{array}$$

3. 
$$\begin{array}{r} 33 \\ \times 4 \\ \hline \end{array}$$

**Q.4 Complete the patterns.**

2

- 2, 4, 6, 8, 10, 12, 14, \_\_\_\_\_
- Aa, Bb, Cc, Dd, Ee, \_\_\_\_\_

**Q.5 Solve the word problem:**

2

- There are 40 students in my class. 24 are boys. How many girls are there?  
**Solve:**



Ans: \_\_\_\_\_

**Q.6 Complete the table of 9.**

**2**

$9 \times 1 = \boxed{\phantom{00}}$

$9 \times 6 = \boxed{\phantom{00}}$

$9 \times 2 = \boxed{\phantom{00}}$

$9 \times 7 = \boxed{\phantom{00}}$

$9 \times 3 = \boxed{\phantom{00}}$

$9 \times 8 = \boxed{72}$

$9 \times 4 = \boxed{36}$

$9 \times 9 = \boxed{\phantom{00}}$

$9 \times 5 = \boxed{\phantom{00}}$

$9 \times 10 = \boxed{\phantom{00}}$

**E.V.S. (15 Marks)**

**Q.1 Tick the correct answer.**

**2**

1. We get cotton from .....

- (a) Cotton plant                      (b) Mango plant                      (c) Rose plant

2. This animal lives on trees.

- (a) Lion                                      (b) Bear                                      (c) Monkey

3. An ATM is an automatic machine of a .....

- (a) Market                                      (b) Bank                                      (c) Hospital

4. This helps us to fight diseases.

- (a) Toy    (b) Book    (c) Food

**Q.2 Match the following**

**2**

**Column A**

**Column B**

- |              |              |
|--------------|--------------|
| 1. Drink     | is unhealthy |
| 2. Junk food | den          |
| 3. Lion      | water plant  |
| 4. Lotus     | clean water  |

**Q.3 Circle the odd one out in each.**

**2**

- |         |            |        |
|---------|------------|--------|
| 1. Road | Footpath   | Play   |
| 2. Car  | Blackboard | Duster |



- |    |        |      |              |
|----|--------|------|--------------|
| 3. | Diwali | Holi | Republic Day |
| 4. | Lungs  | Hand | Brain        |

**Q.4 Fill in the blanks.** **3**  
[outdoor, library, monsoon]


1. It rains heavily during the \_\_\_\_\_ season.
2. Cricket and football are \_\_\_\_\_ games.
3. We read books in the \_\_\_\_\_.

**Q.5 Answer these questions.** **2**

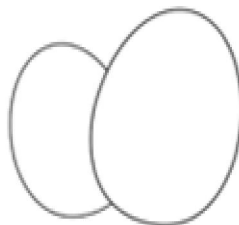

1. When do we celebrate Christmas ?  
Ans: \_\_\_\_\_.
2. Why do we need a post office ?  
Ans: \_\_\_\_\_.

**Q.6 Draw the diagram of any two vegetables.** **2**

**Q.7 Look at the picture and complete the word puzzle.** **2**



|   |
|---|
| M |
|   |
| N |
|   |
| E |
|   |



|   |  |   |  |   |
|---|--|---|--|---|
|   |  | G |  |   |
|   |  |   |  |   |
|   |  |   |  |   |
|   |  |   |  |   |
| T |  | A |  | N |

