



MACRO VISION ACADEMY, BURHANPUR

SAMPLE PAPER

Office Use

Class: III (Set-C)

Time 1:30 Hrs.

M.M.: 50

Student's Name:- _____ **Father's Name** _____

City:- _____ **Mobile No:** _____ **Exam Date:** _____

Studying in:- _____ **Board:-** MP Board/CBSE/Other _____ **Appearing for class** _____

OFFICE	ENGLISH 15	MATHEMATICS 20	SCIENCE 15	OBTAINED MARKS 50
USE				

English (15 Marks)

Q.1 Read the passage carefully and answer the questions: **4**

Baby Chickens

A mother chicken sat on her nest. She was a big chicken with yellow feathers. She was sitting on some eggs. One day the eggs cracked open. Then some little chicks popped out of the eggs. Now the chicken had six chicks.

1. Where did the mother chicken sit ?

Ans: _____.

2. What where the colour of her feathers ?

Ans: _____.

3. What was the mother chicken sitting on ?

Ans: _____.

4. What happened to the eggs one day ?

Ans: _____.

Q.2 Circle the correct pronouns: **1**

1. We/I are going for a picnic.

2. I/he am doing work.

Q.3 Fill in the blanks by using the correct words [is, am or are] words given in bracket: 3

1. The books _____ on the desk.

2. A girl _____ singing.

3. I _____ teaching.

Q.4 Write the plural of these words: **1**

(a) Carrot - _____

(b) Drum - _____

Q.5 Circle the verbs in the sentences: **2**

1. The bell is ringing.


2. Children are playing cricket.

Q.6 Fill the correct adjective [handsome, heavy]: **2**

1. My books are _____.

2. You are looking _____.

Q.7 Look at the picture and write two lines on it: **2**



Mathematics (20 Marks)

Q.1 Tick the correct answer: **4**

1. The smallest number among 93, 96 and 84 is _____

(a) 96

(b) 84

(c) 93

2. The place value of underline digit 9241 is _____

(a) Ones

(b) Tens

(c) Hundreds

3. Nine hundred ninety is written as _____

(a) 429

(b) 890

(c) 990

4. The fourth month of the year is _____

(a) March

(b) April

(c) June

Q.2 Match the following: **4**

Column A

Column B

1. 5 + 1

36

2. Square of 6

6

3. Last month

Ice-cream

4. Cone

December

Q.3 Solve the following: **6**

H T O

(a) 3 2 1

+ 2 4 5

H T O

(b) 6 4 8

- 3 2 4

T O

(c) 2 3

× 3

Q.4 Complete the patterns: **2**

1. 10, 20, 30, 40, 50, _____

2. aa, bb, cc, dd, _____

Q.5 Solve the word problems:

2

1. I had 420 ducks. Doddy gave me 400 more. How many ducks have I got now?
Solve:

Q.6 Write the table of 6:

2

EVS (15 Marks)

Q.1 Tick the correct answer:

2

1. An ATM is an Automatic Machine of a _____
(a) Bank (b) Market (c) Hospital
2. This farm animal gives us eggs _____
(a) Sheep (b) Cow (c) Hen
3. We eat the root of this plant _____
(a) Carrot (b) Apple (c) Rice
4. We need this to breathe _____
(a) Air (b) Water (c) Land

Q.2 Match the following:

2

- | Column A | Column B |
|-----------------|-------------------|
| 1. Forest | Stamps |
| 2. Diwali | Trees and animals |
| 3. Holi | Diyas |
| 4. Post Office | Gulal |

Q.3 Circle the odd one out in each:

2

1. Milk Egg Fruit
2. Chalk Blackboard Gun
3. Farmer Postman Chalk

Q.4 Fill in the blanks: **3**
[Shopkeeper, Muscles, Earth]

1. _____ help the bones to move.
2. _____ sell different things to you.
3. The _____ is our home.

Q.5 Answer the following questions: **2**

1. Which season do you like best ?


Ans: _____.


2. Why should we eat food ?

Ans: _____.


Q.6 Draw Traffic Signal: **2**


Q.7 Look at the picture and complete the word puzzle: **2**





	A	
	R	
B		
	T	
	E	





4